


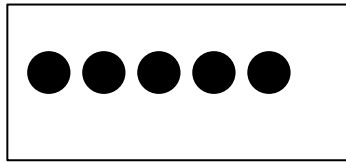
Name _____

Date _____

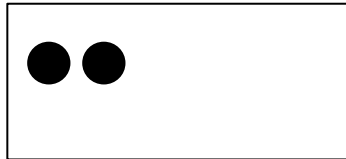
Look at the 5-group cards. Draw dots to make 10. Fill in the number sentences.



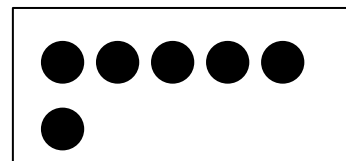
$$\square + \square = 10$$



$$\square + \square = 10$$



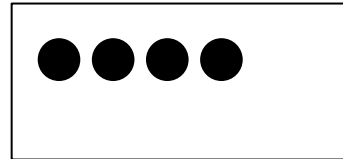
$$\square + \square = 10$$




$$\square + \square = 10$$




$$\square + \square = 10$$



$$\square + \square = 10$$



$$\square + \square = 10$$



$$\square + \square = 10$$

On the back of this page, create a 5-group card. Draw dots to make 10, and write a number sentence.