


Name _____

Date _____

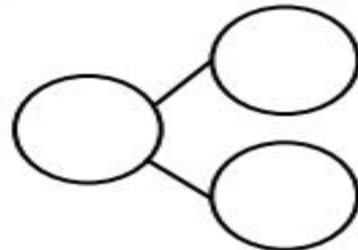
Complete a number bond and number sentence for each problem.

Color 6 blocks blue. Color the rest red. All of the blue blocks fell off the table. How many blocks are still on the table?



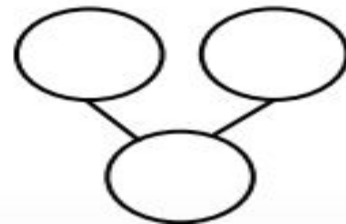
$$\underline{\quad} - \underline{\quad} = \underline{\quad}$$

Color some blocks orange and the rest yellow to make 10. All of the yellow blocks fell off the table. How many blocks are left?



$$\underline{\quad} - \underline{\quad} = \underline{\quad}$$

Draw 5 dogs and some cats the 5-group way.



$$\underline{\quad} + \underline{\quad} = \underline{\quad}$$

There were 10 horses in the yard. Some were brown, and some were white. Draw the horses the 5-group way. The brown ones went back into the barn. How many horses were still in the yard? Draw a number bond, and write a subtraction sentence.

Make your own story using 10 as your whole. Draw your picture using the 5-group way. Draw a number bond, and write a subtraction sentence to match your story.

Solve:

$5 + 4 = \underline{\quad}$

$6 + 4 = \underline{\quad}$

$3 + 7 = \underline{\quad}$

$6 + 5 = \underline{\quad}$

$8 + 4 = \underline{\quad}$

$9 + 2 = \underline{\quad}$

$7 + 6 = \underline{\quad}$

$10 + 5 = \underline{\quad}$

$11 + 7 = \underline{\quad}$