



Name \_\_\_\_\_

Date \_\_\_\_\_

Look at the 5-group cards. Draw dots to make 10. Fill in the number sentences.



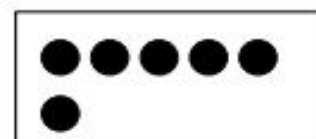
$$\square + \square = 10$$



$$\square + \square = 10$$




$$\square + \square = 10$$



$$\square + \square = 10$$



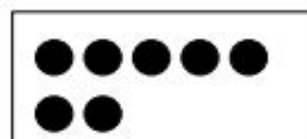
$$\square + \square = 10$$



$$\square + \square = 10$$

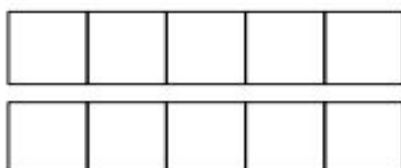


$$\square + \square = 10$$



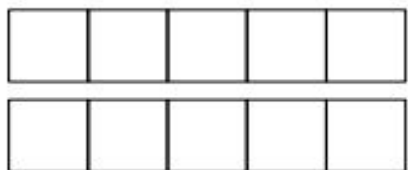
$$\square + \square = 10$$

Color 2 boxes red the 5-group way. Color the rest blue to make 10. Fill in the number sentence.



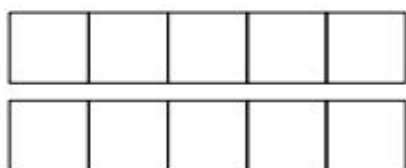
$$\square + \square = \square$$

Color 5 boxes red the 5-group way. Color the rest blue to make 10.  
Fill in the number sentence.



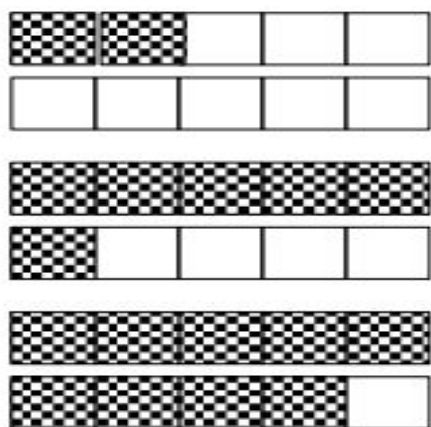
$$\square + \square = \square$$

Color 7 boxes red the 5-group way. Color the rest blue to make 10.  
Fill in the number sentence.



$$\square + \square = \square$$

Match.



- $1 + 9 = 10$
- $8 + 2 = 10$
- $6 + 4 = 10$

Draw more to make 10.

|  |  |
|--|--|
|  |  |
|  |  |
|  |  |
|  |  |
|  |  |